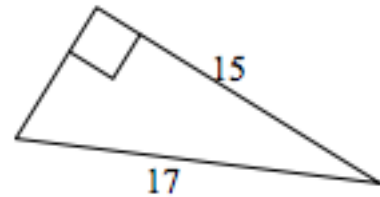
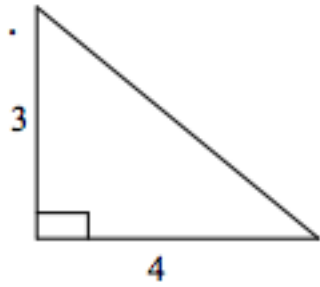
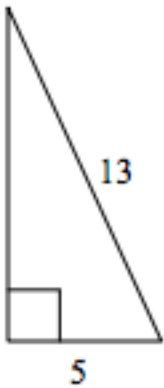


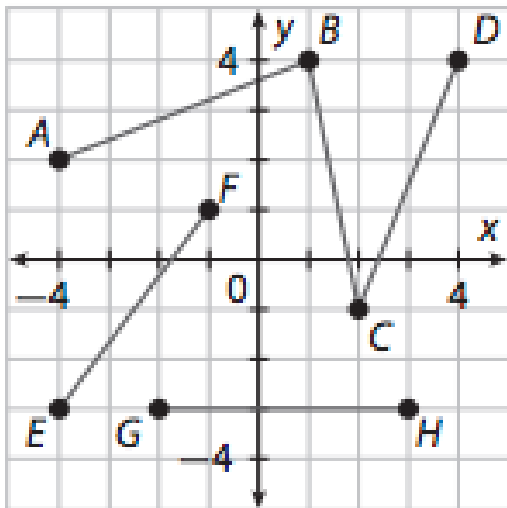
Basics of Geometry HW V

Find the midpoint between points $(3.5, 7)$ and $(-5, 10)$ using the midpoint formula.

Find the value of each missing leg or hypotenuse using the Pythagorean Theorem.



Find the length of each segment below.



AB

BC

CD

EF

GH