

**PLEASE BRING
YOUR VOLUME 2
TEXTBOOK!!!!!!**

Warmup $1/(2^2)^2$

1. Which of the following best describes a negative correlation?
 - A) The length of a person's arms over time.
 - B) The depth of a bath tub as it drains over time.
 - C) The amount of time you drive as compared to the distance traveled.
 - D) The total cost of a pizza and the number of toppings you put on it

2. Simplify by combining like terms:

$$-10 + 7x + 24 - 2x$$

3. Solve:

$$\frac{x + 5}{2} = 10$$

4. Solve:

$$3x + 15 - 7x = -7$$

5. Solve:

$$1 - \frac{3}{8}x = 0$$

Check P. Theorem Worksheet

TRANSFORMATIONS!!!



Transformations

- A **transformation** is a function that changes the position, size, or shape of a figure.

Preimage and Image

- The original figure is called the **preimage**.
- The resulting figure is called the **image**.
- A transformation *maps* the preimage to the image.

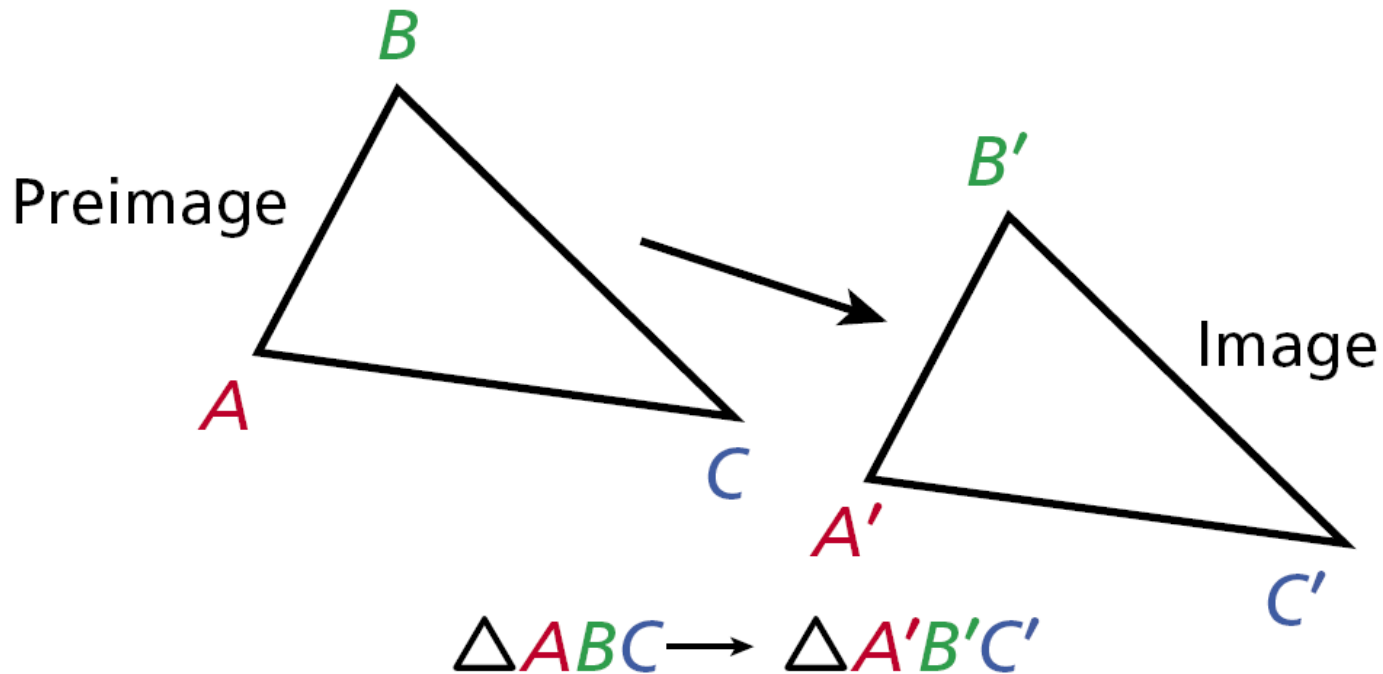
Transformations are Functions

- A function is a rule that pairs each input (x-value) with exactly one output (y-value).

Notation

- There are two types of notation that we use in transformations.
 - Prime Notation
 - Coordinate Notation

You can use prime notation to name the image of a point. Note that a transformation is sometimes called a mapping.



Prime Notation

- Arrow notation (\rightarrow) is used to describe a transformation, and primes ($'$) are used to label the image.

Coordinate Notation:

One way to write a rule for a transformation on a coordinate plane.

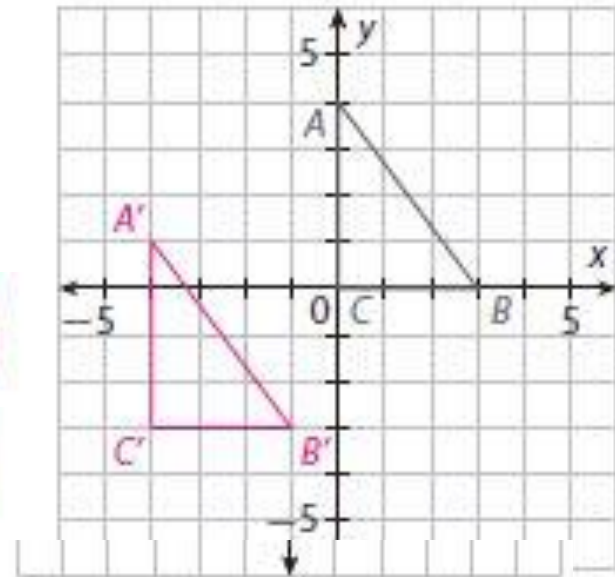
The notation uses an arrow to show how the transformation changes the coordinates of a general point. i.e. $(x, y) \rightarrow (x + a, y + b)$.

pg. 801 A

Find the unknown coordinates for each transformation and draw the image. Then complete the description of the transformation and compare the image to its preimage.

Ⓐ $(x, y) \rightarrow (x - 4, y - 3)$

Preimage	Rule	Image
(x, y)	$(x, y) \rightarrow (x - 4, y - 3)$	$(x - 4, y - 3)$
$A(0, 4)$	$\rightarrow A'(0 - 4, 4 - 3) =$	$A'(-4, 1)$
$B(3, 0)$	$\rightarrow B'(3 - 4, 0 - 3) =$	$B'(-1, -3)$
$C(0, 0)$	$\rightarrow C'(0 - 4, 0 - 3) =$	$C'(-4, -3)$



The transformation is a translation 4 units (left/right) and 3 units (up/down).

A comparison of the image to its preimage shows that

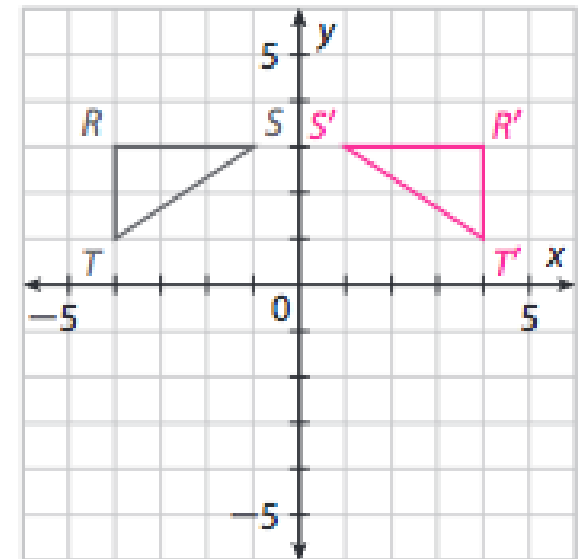
Possible answer: the image is the same size and shape as the preimage

You try!!!

pg. 802 (B, C, 1 and 2)

B $(x, y) \rightarrow (-x, y)$

Preimage (x, y)	Rule $(x, y) \rightarrow (-x, y)$	Image $(-x, y)$
$R(-4, 3)$	$\rightarrow R'(-(-4), 3)$	$= R'(\boxed{4}, \boxed{3})$
$S(-1, 3)$	$\rightarrow S'(-(-1), 3)$	$= S'(\boxed{1}, \boxed{3})$
$T(-4, 1)$	$\rightarrow T'(-(-4), 1)$	$= T'(\boxed{4}, \boxed{1})$



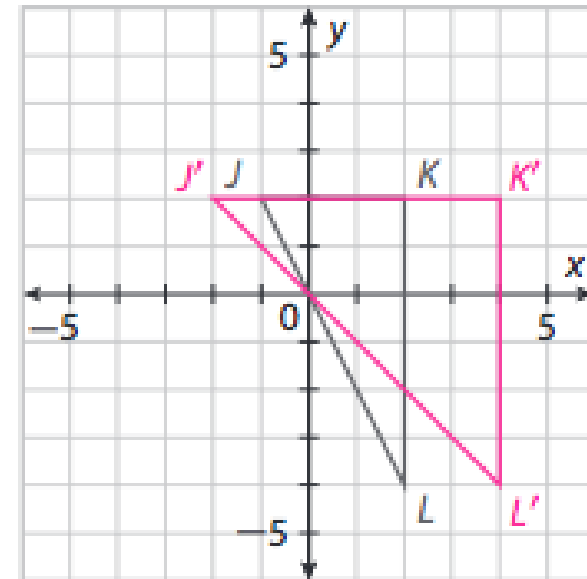
The transformation is a reflection across the $(x\text{-axis}, y\text{-axis})$.

A comparison of the image to its preimage shows that

Possible answer: the image is the same size and shape as the preimage, but it is flipped over the y-axis

Ⓒ $(x, y) \rightarrow (2x, y)$

Preimage (x, y)		Rule $(x, y) \rightarrow (2x, y)$		Image $(2x, y)$
$J(-1, 2)$	\rightarrow	$J'(2 \cdot -1, 2)$	$=$	$J'(-2, 2)$
$K(2, 2)$	\rightarrow	$K'(2 \cdot 2, 2)$	$=$	$K'(4, 2)$
$L(2, -4)$	\rightarrow	$L'(2 \cdot 2, -4)$	$=$	$L'(4, -4)$



The transformation is a horizontal stretch by a factor of **2**.

A comparison of the image to its preimage shows that

Possible answer: the image and the preimage are both right triangles, but they do not have the same size or shape

Reflect

- Discussion** How are the transformations in Steps A and B different from the transformation in Step C?
The transformations in Steps A and B preserve the size and shape of the right triangle. The transformation in Step C changes the shape of the right triangle.
- For each transformation, what rule could you use to map the image back to the preimage?
A. $(x, y) \rightarrow (x + 4, y + 3)$; B. $(x, y) \rightarrow (-x, y)$; C. $(x, y) \rightarrow (0.5x, y)$

Rigid Motion:

A transformation that changes the position of a figure without changing the size or shape of the figure.

Two figures that have the same size and the same shape are called congruent!

Translations, reflections, and rotations are rigid motions.

Do p. 805 #6

Nonrigid Motions:

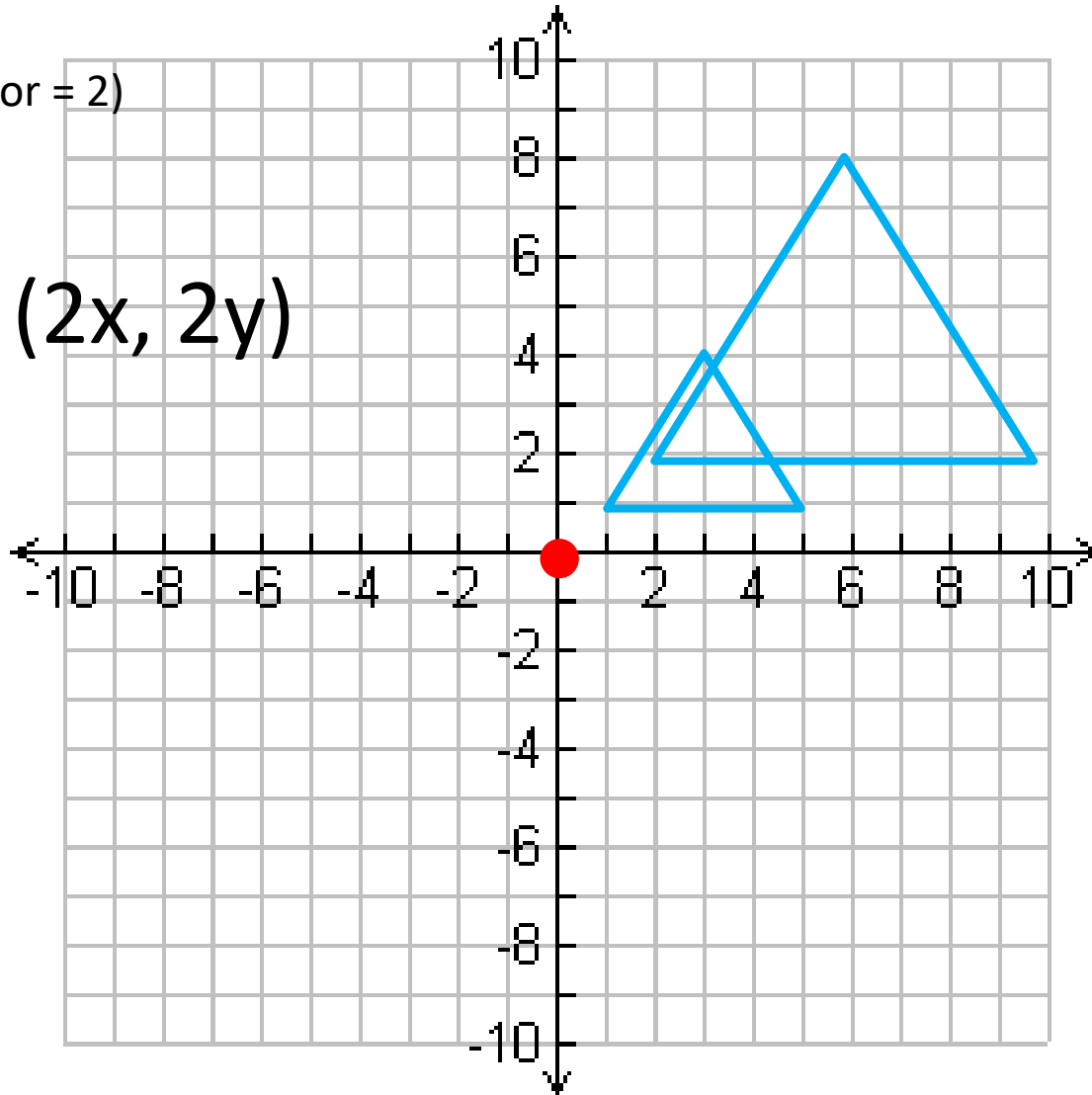
Transformations that stretch or compress figures are not rigid motions because they do not preserve distance.



Dilations are Non-Rigid transformations

(Scale factor = 2)

$$(x, y) \rightarrow (2x, 2y)$$



Homework

pg. 808-810 (1-6, 10)