

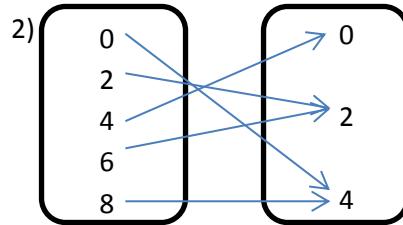
Functions Worksheet

FOR EACH:

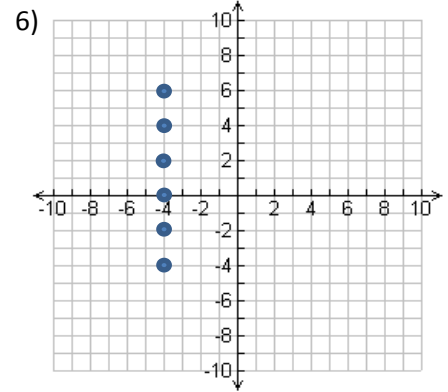
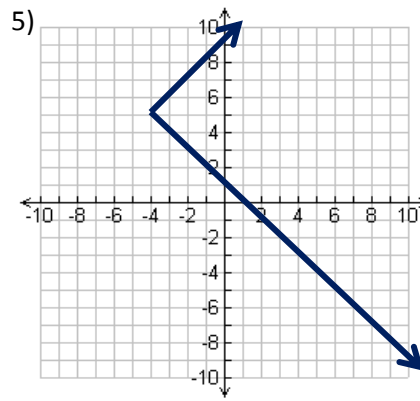
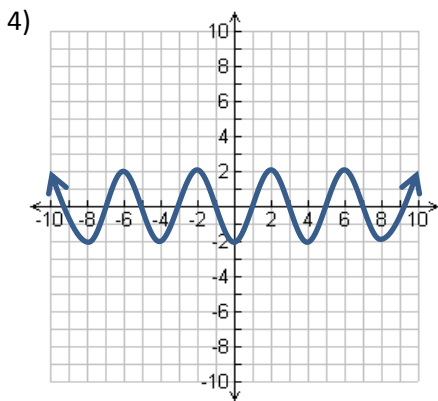
Is it a function? Explain why or why not.

1)

x	y
-6	2
-3	2
0	2
4	2
8	2



3) $(-8, 4)$ $(3, 7)$ $(5, 6)$ $(3, -8)$ $(1, 2)$



7) Input = Word; Output = Number of vowels in the word

8) Input = Meigs teacher; Output = Student who has that teacher for homeroom

9) Input = Any number; Output = Absolute value of that number