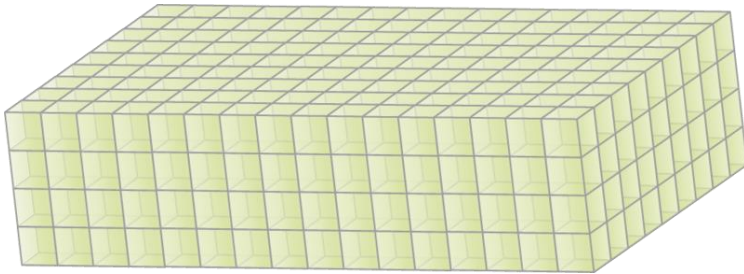


Name: _____

Prisms Worksheet

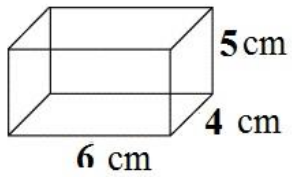
Show all of your work!!!

1) Below is a picture of the boxes in the storeroom at Wilfred's Warehouse. How many boxes are there?

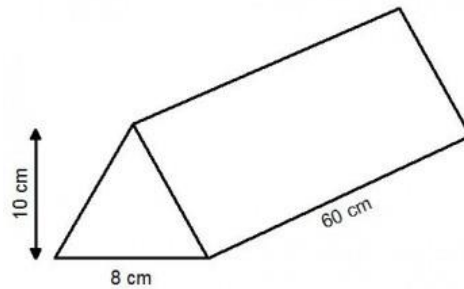


Find the volume of each prism.

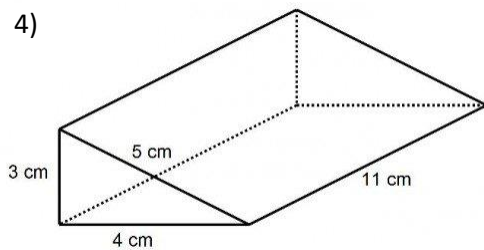
2)



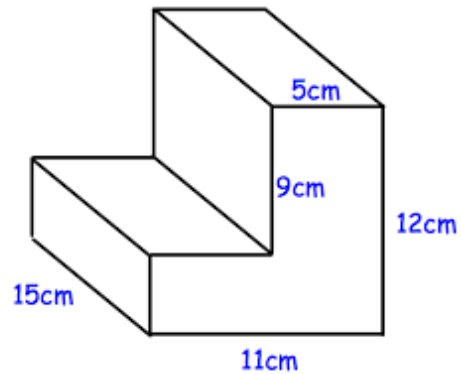
3)



4)



5)



6) A swimming pool that is 8 meters long, 6 meters wide, and 1.5 meters deep is being filled with water. It takes 6 seconds for each cubic meter to flow into the pool. How many minutes will it take to fill the pool completely?