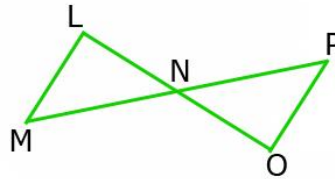


Triangle Congruence Proofs

Given: $\overline{ML} \parallel \overline{OP}$; $\overline{ML} \cong \overline{OP}$

Prove: $\triangle MLN \cong \triangle PON$

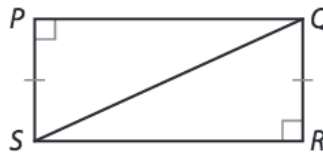
Write a Paragraph Proof!



Given: $\angle P$ and $\angle R$ are right angles. $\overline{PS} \cong \overline{RQ}$

Prove: $\triangle PQS \cong \triangle RSQ$

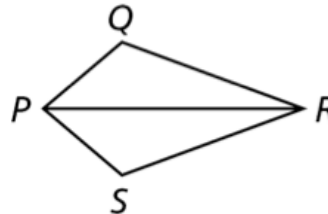
Write a Flowchart Proof!



Given: \overline{PR} bisects $\angle QPS$ and $\angle QRS$.

Prove: $\overline{PQ} \cong \overline{PS}$

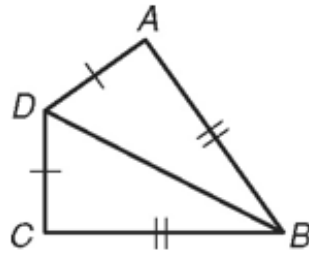
Write a Flowchart Proof!



Given: $\overline{AD} \cong \overline{CD}$, $\overline{AB} \cong \overline{CB}$

Prove: $\angle A \cong \angle C$

Write a Two Column Proof!



Given: $\angle PNQ \cong \angle LNM$, $\overline{PN} \cong \overline{LN}$,
 N is the midpoint of \overline{QM} .

Prove: $\overline{PQ} \cong \overline{LM}$

Write a Two Column Proof!

